



Photograph A for Question 1

A river channel



Fig. 1A for Question 2

The proportions of greenhouse gases in the atmosphere that result from human activities

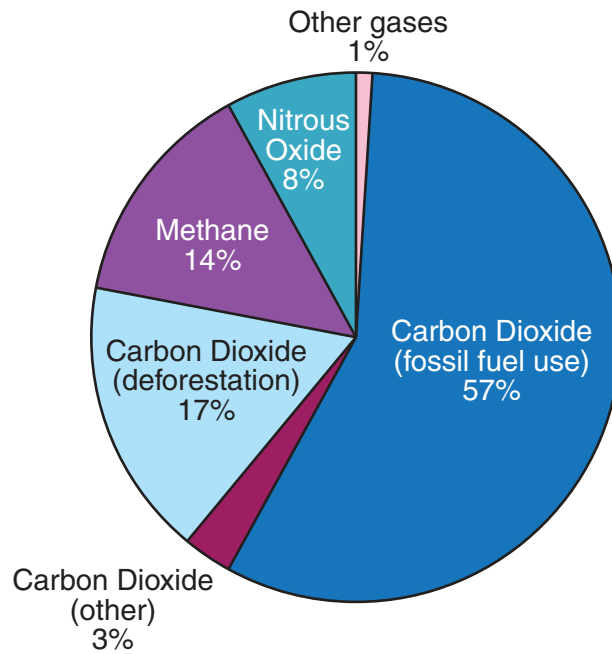


Fig. 1B for Question 2

The proportions of different human activities that produce greenhouse gases

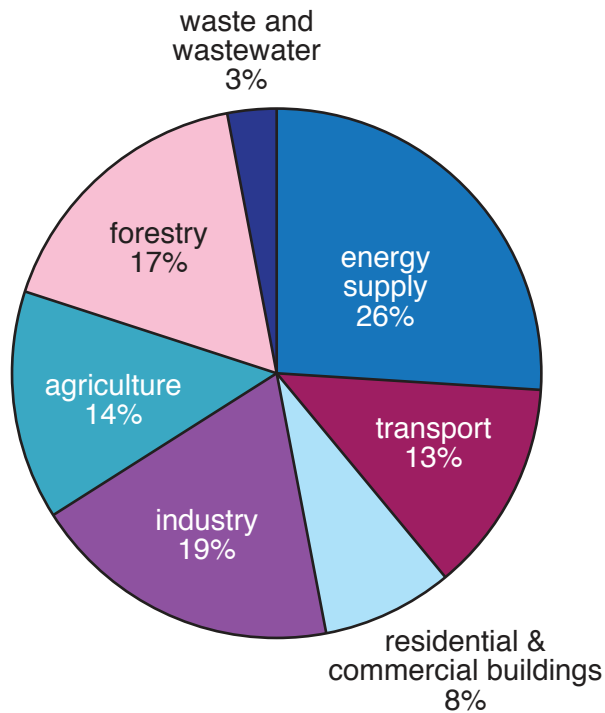


Fig. 2 for Question 3

A boundary between two tectonic plates

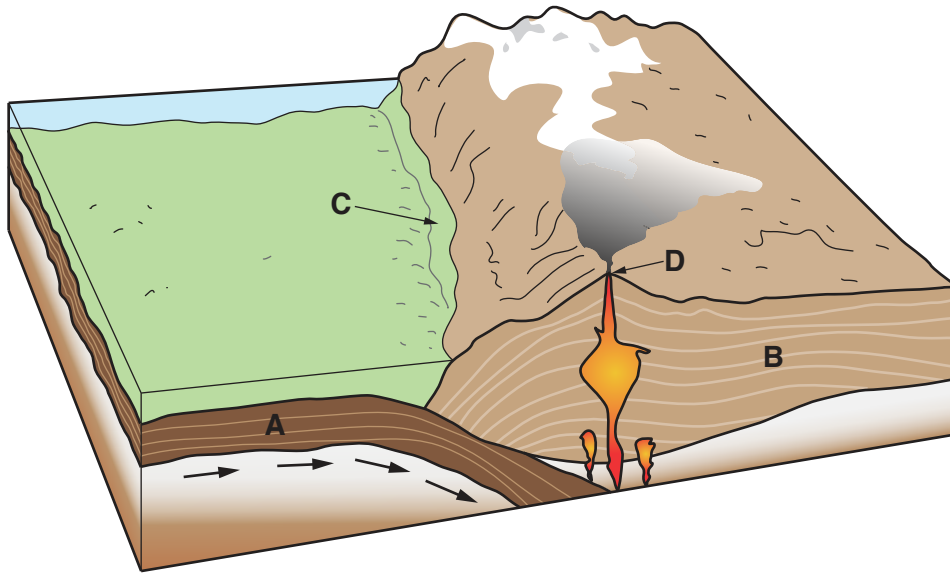
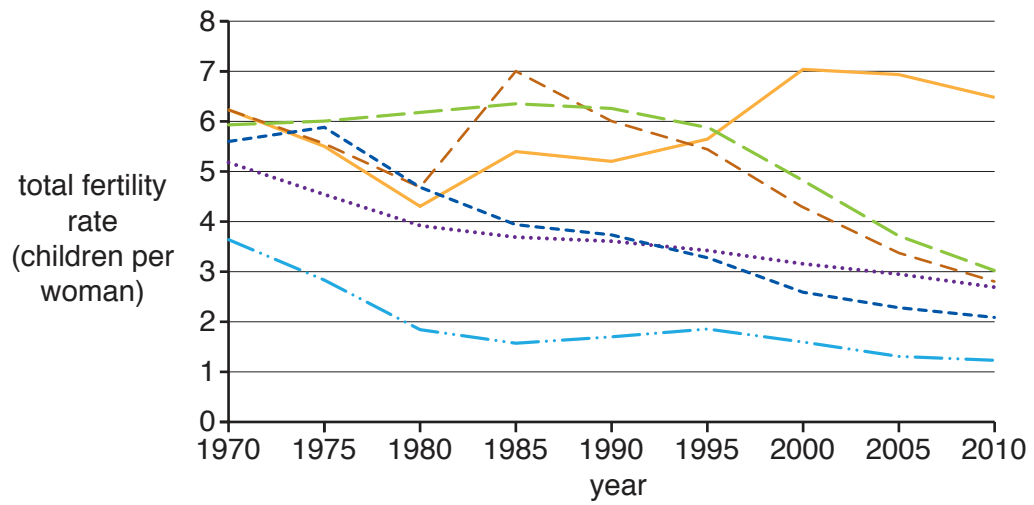


Fig. 3 for Question 4

## Total fertility rates for selected countries in South-east Asia, 1970–2010



## Key

- Timor-Leste
- - - Laos
- - - Cambodia
- ..... Malaysia
- - - Brunei Darussalam
- . - . Singapore

Figs 4A and 4B for Question 5

Age/sex pyramids for two countries in the Middle East, 2007

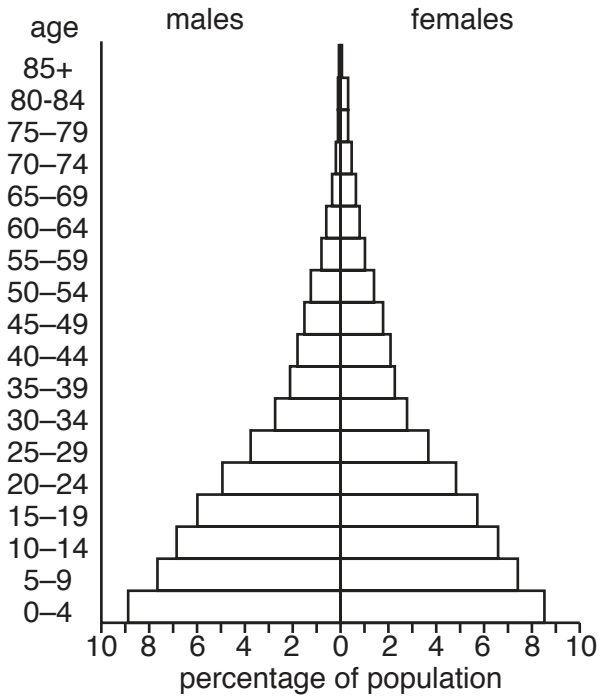


Fig. 4A

Yemen

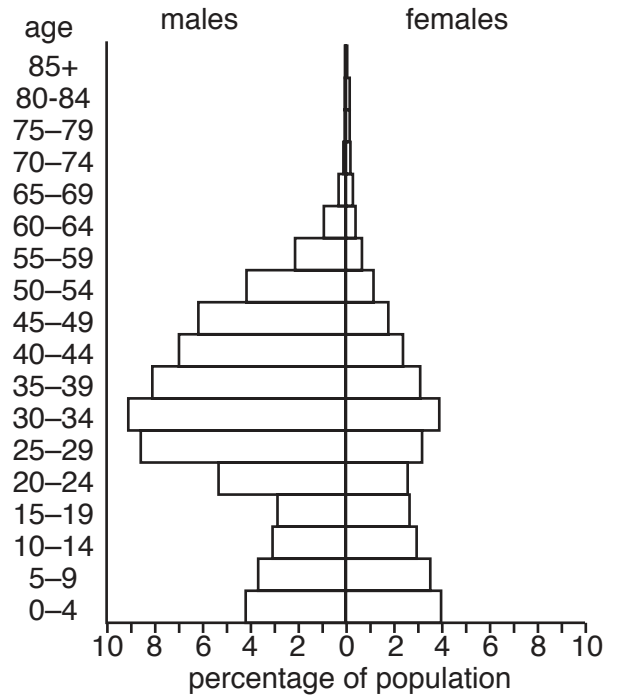


Fig. 4B

Qatar

Photograph B for Question 6

Urban renewal in London Docklands, UK, 2007



**BLANK PAGE**

---

Permission to reproduce items where third-party owned material protected by copyright is included has been sought and cleared where possible. Every reasonable effort has been made by the publisher (UCLES) to trace copyright holders, but if any items requiring clearance have unwittingly been included, the publisher will be pleased to make amends at the earliest possible opportunity.

To avoid the issue of disclosure of answer-related information to candidates, all copyright acknowledgements are reproduced online in the Cambridge International Examinations Copyright Acknowledgements Booklet. This is produced for each series of examinations and is freely available to download at [www.cie.org.uk](http://www.cie.org.uk) after the live examination series.

Cambridge International Examinations is part of the Cambridge Assessment Group. Cambridge Assessment is the brand name of University of Cambridge Local Examinations Syndicate (UCLES), which is itself a department of the University of Cambridge.